

Home learning for Room 4


Week: 23-27 June

Due Date: 27th June

Please write your answers in your home learning book.

Spelling

1. Practice your spelling words.
2. Write either a compound or complex sentence using your spelling words.
3. Underline the spelling word in your sentence



Punctuation marks

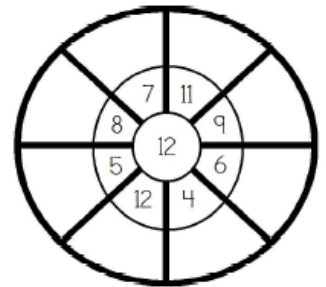
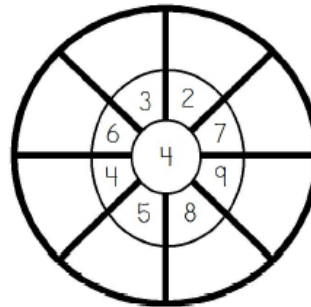
Rewrite the sentences in your book and add the correct punctuation marks. Use the key below:

KEY			
" "	speech marks	.	full stop
,	comma	A-Z	capital letter

1. i want to go home shouted martha
2. is that a clown asked steven
3. i think that is funny laughed lenny
4. mother shouted you better do you work
5. the boy boasted i live in a fancy house
6. natalia replied you have done a great job
7. i am going on holiday soon lii said to Brisbane
8. come in kasanita said the dinner is ready
9. thank you naomi replied you are very kind

Multiplication Wheels

Multiply the number in the centre of the wheel by the number in the middle to find the number on the outside.

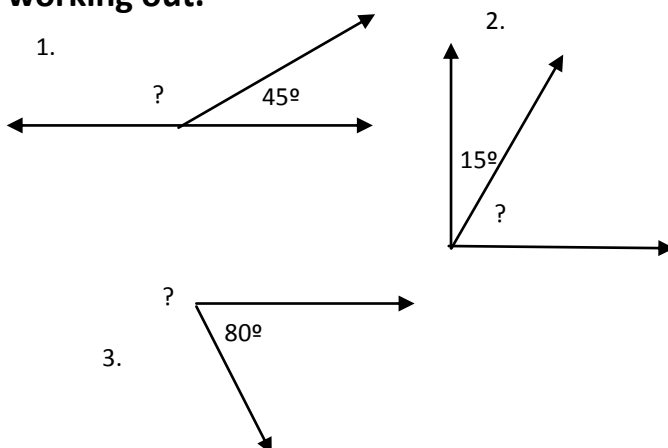


Te Reo Maori - Marae wananga

Answer these questions in your book.

1. A visitor from another country asks what a koha is. Write a short description of what you would say.
2. What is the reason for the karanga?
3. Why is there a marae atea?
4. People take their shoes off when they go into the wharenui. Why?
5. Write a piece of cameo writing of your trip to Te Kotahitanga Marae.

Angles - solve these angles and show your working out.



Problem Solving

The 74 students from Pukekohe North School are going on a school trip to Waiheke Island. The cost of the ferry ticket is \$53.00. What is the total amount of money needed for the field trip? Show your working out.



Please visit our wikispace: <http://terakiroom4.wikispaces.com> to view some of your child's work. Our wikispace also has a 'Whanau Support' page where you can view a variety of activities that can be used at home to support your child's learning. Thank you for all your help. 😊

Parent/Guardian to sign: